

Answer **all** questions in the spaces provided.

- 1 How many centimetres are there in 3.7 metres?
Circle your answer.

[1 mark]

0.037

0.37

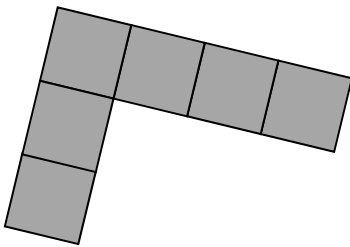
37

370

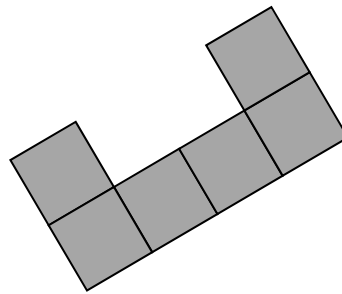
- 2 Which of these is the **net** of a **cube**?
Circle the correct letter.

[1 mark]

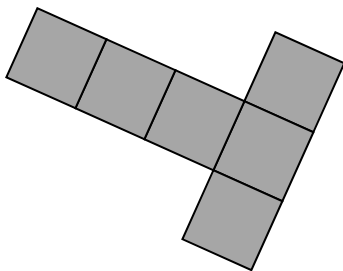
A



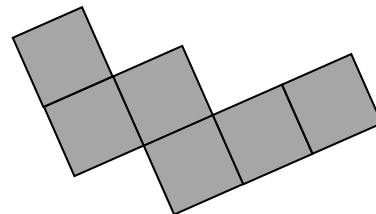
B



C



D



3 Circle the fraction that is **not** equivalent to $\frac{3}{8}$

[1 mark]

$$\frac{6}{16}$$

$$\frac{9}{24}$$

$$\frac{12}{32}$$

$$\frac{15}{35}$$

4 Simplify $5a - (2a + 6)$

Circle your answer.

[1 mark]

$$3a + 6$$

$$9a$$

$$-3a$$

$$3a - 6$$

Turn over for the next question

5 Complete the table.

[2 marks]

Minutes	Hours
30	$\frac{1}{2}$
40	
	$2\frac{1}{4}$

6 Here are some numbers.

9.6

12.6

15.4

7.6

12.4

17.4

Write the numbers in pairs so that the **sum** of the numbers in each pair is the same.

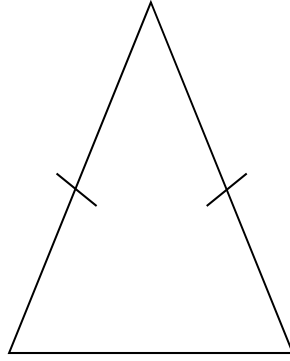
[2 marks]

Answer _____ and _____

_____ and _____

_____ and _____

7 This triangle is drawn accurately.



What type of triangle is it?

Tick **two** boxes.

[1 mark]

acute-angled

obtuse-angled

equilateral

isosceles

scalene

Turn over for the next question

8 Work out 51% of 400

[2 marks]

Answer _____

9 Write 180 g as a fraction of 3 kg
Give your answer in its simplest form.

[2 marks]

Answer _____

10 Here are some properties of numbers.

- A Even
- B Odd
- C Prime
- D Square
- E Two-digit

10 (a) Which **two** properties does the number 4 have?

Circle the correct letters.

[1 mark]

A B C D E

10 (b) Can one number have **all** of the properties?

Tick a box.

Yes

No

Cannot tell

Give a reason for your answer.

[1 mark]

10 (c) Write down a number with **three** of the properties.

State which properties it has.

[2 marks]

Number _____

Properties _____, _____, _____

Turn over ►

12 Here are three expressions.

$$\frac{b}{a}$$

$$a - b$$

$$ab$$

When $a = 2$ and $b = -6$ which expression has the smallest value?

You **must** show your working.

[2 marks]

Answer _____

Turn over for the next question

- 13** The table shows the ratio of teachers to children needed for two activities.

	teachers : children
Climbing	1 : 4
Walking	1 : 9

- 13 (a)** There are 7 teachers to take children climbing.

What is the greatest number of children that can go climbing?

[1 mark]

Answer _____

- 13 (b)** 49 children want to go walking.

What is the smallest number of teachers needed?

[1 mark]

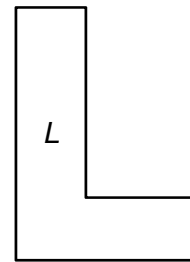
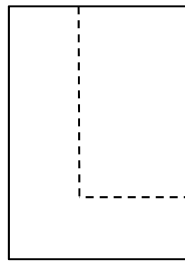
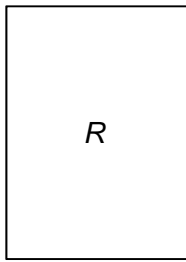
Answer _____

14

Shape R is a rectangle.

A smaller rectangle is cut from R to form shape L .

Not drawn
accurately



Which **one** of these statements is true?

Tick a box.

The perimeter of R is **longer than** the perimeter of L

The perimeter of R is the **same as** the perimeter of L

The perimeter of R is **shorter than** the perimeter of L

It is **not** possible to tell which perimeter is longer

[1 mark]

Turn over for the next question

15 Textbooks are stored on two shelves.

Each shelf is 0.72 metres long.

Each textbook is 30 millimetres wide.

Not drawn
accurately



Can 50 textbooks be stored on these shelves?

You **must** show your working.

[3 marks]

Answer _____

16 All tickets for a concert are the same price.

Amy and Dan pay £63 altogether for some tickets.

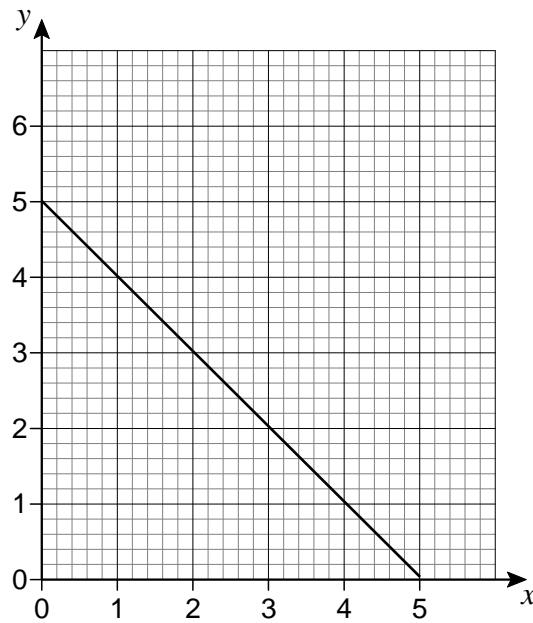
Amy pays £24.50 for 7 tickets.

How many tickets does Dan buy?

[4 marks]

Answer _____

- 17 Here is the graph of $y = 5 - x$ for values of x from 0 to 5



- 17 (a) On the same grid, draw the graph of $y = x + 1$ for values of x from 0 to 5

[2 marks]

- 17 (b) Use the graphs to solve the simultaneous equations

$$y = 5 - x \quad \text{and} \quad y = x + 1$$

[1 mark]

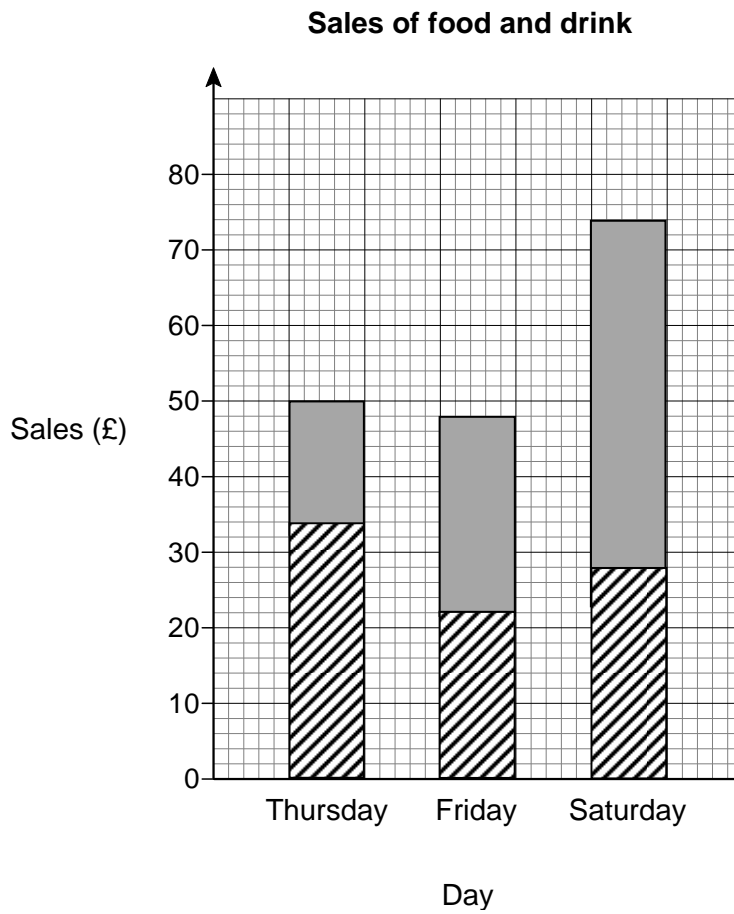
$$x = \underline{\hspace{4cm}}$$

$$y = \underline{\hspace{4cm}}$$

- 18 The table shows the sales of food and drink for three days at a market stall.

Day	Sales of food (£)	Sales of drink (£)
Thursday	34	16
Friday	22	48
Saturday	46	28

Hannah uses this information to draw a composite bar chart.



Write down **three** different mistakes that she has made.

[3 marks]

Mistake 1 _____

Mistake 2 _____

Mistake 3 _____

19 Sam wants to buy a camera for £345

He has already saved £96

Each week

his pay is £80

he saves 30% of this pay.

How many **more** weeks must he save?

[4 marks]

Answer _____ weeks

20 (a) w and x are **whole** numbers.

$$w > 40$$

$$x < 30$$

Work out the **smallest** possible value of $w - x$

[2 marks]

Answer _____

20 (b) y and z are **whole** numbers.

$$y < 60$$

$$z \leq 50$$

Work out the **largest** possible value of $y + z$

[2 marks]

Answer _____

21 (a) Work out 2.4×0.002

[1 mark]

Answer _____

21 (b) Write 1.2×10^{-5} as an ordinary number.

[1 mark]

Answer _____

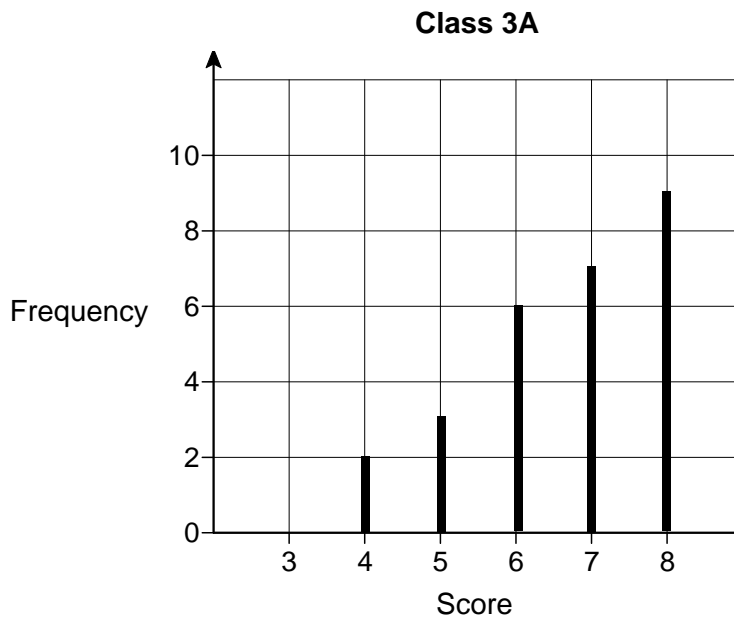
21 (c) Write 2 500 000 in standard form.

[1 mark]

Answer _____

Turn over for the next question

- 22 The diagram shows information about the scores of Class 3A in a spelling test.



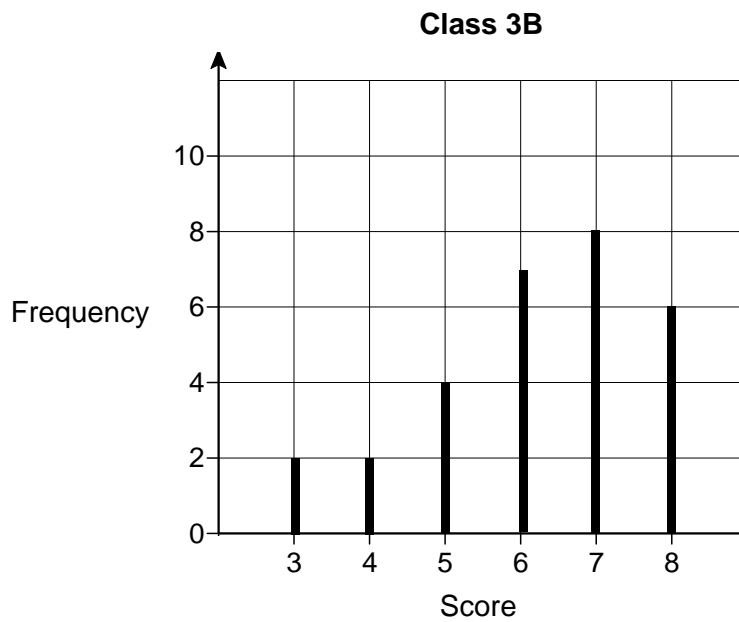
- 22 (a) A student is chosen at random from Class 3A.

Work out the probability that the student's score was the **mode** for the class.

[3 marks]

Answer _____

The diagram shows information about the scores of Class 3B in the same test.



- 22 (b)** Show that Class 3A had more **consistent** scores than Class 3B.
Use the data from both diagrams.

[2 marks]

- 22 (c)** Lucy is one of the 29 students in **Class 3B**.
Her score was the same as the **median** score for her class.

Work out her score.

[2 marks]

Answer _____

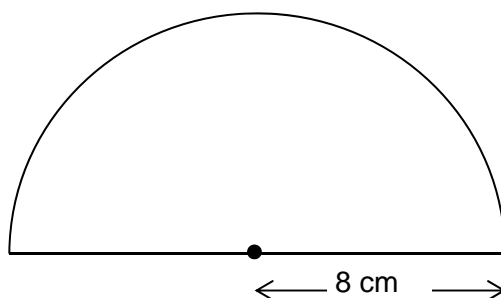
- 23 Kelly is trying to work out the two values of w for which $3w - w^3 = 2$
Her values are 1 and -1

Are her values correct?

You **must** show your working.

[2 marks]

- 24 The diagram shows a semicircle of radius 8 cm



Not drawn accurately

Work out the area of the semicircle.

Give your answer in terms of π .

[2 marks]

Answer _____ cm^2

25 Work out $2\frac{3}{4} \times 1\frac{5}{7}$

Give your answer as a mixed number in its simplest form.

[3 marks]

Answer _____

26 Solve $5x - 2 > 3x + 11$

[2 marks]

Answer _____

Turn over for the next question

- 27 The n th term of a sequence is $2n + 1$
The n th term of a different sequence is $3n - 1$

Work out the **three** numbers that are

in both sequences

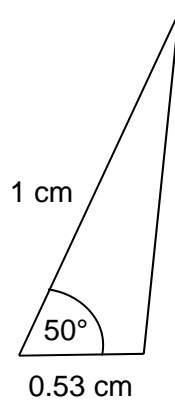
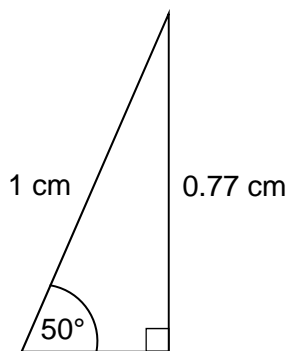
and

between 20 and 40

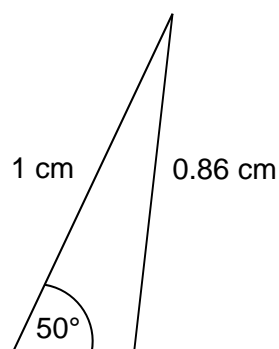
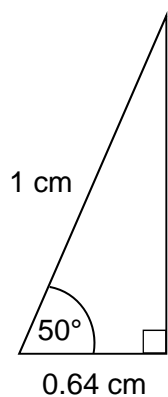
[3 marks]

Answer _____, _____, _____

29 Here are sketches of four triangles.



Not drawn accurately



In each triangle

the longest side is **exactly** 1 cm

the other length is given to 2 decimal places.

29 (a) Circle the value of $\cos 50^\circ$ to 2 decimal places.

[1 mark]

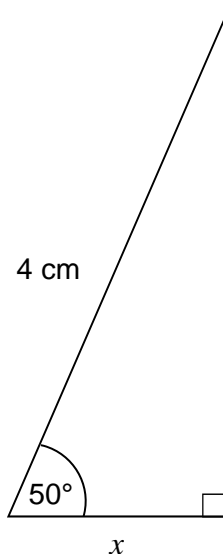
0.77

0.53

0.64

0.86

- 29 (b)** Work out the value of x .
Give your answer to 1 decimal place.



Not drawn
accurately

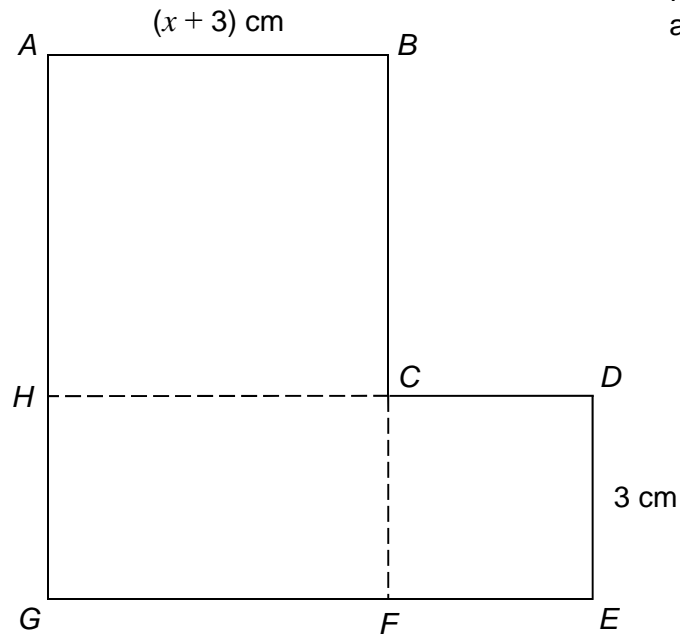
[2 marks]

Answer _____ cm

Turn over for the next question

- 30** $ABCH$ is a square.
 $HCFG$ is a rectangle.
 $CDEF$ is a square.

They are joined to make an L-shape.



Not drawn
accurately

Show that the total area of the L-shape, in cm^2 , is $x^2 + 9x + 27$

[4 marks]

END OF QUESTIONS